



Note: Multiple copies of this CLIC Challenge are not provided since all scores arise through teacher assessment.

CLIC 1

Name: _____


Class: _____

Date: _____


1 T
"1, 2, 3, 4,
5, 6, 7"

2 T
"1, 2, 3,
4, 5, 6, 7,
8, 9, 10"

3 T
1 2
3



4 T
1 5
2 4 3

5 T
How Many?


6 T
I know I
have 10 fingers

7 T
I can tell
you double 1
and double 2

8 T
I can tell you
half of 4,
half of 2

9 T
1 add 1

10 T
3 add 3



MY LAST SCORE?!

HAVE I BEAT THAT?!

10



Note: Multiple copies of this CLIC Challenge are not provided since all scores arise through teacher assessment.

CLIC 2


Name: _____


Class: _____

Date: _____

1 T
"1, 2, 3...
...11, 12, 13"

2 T
3 9
2

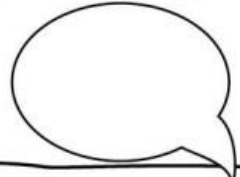
3 How Many? T


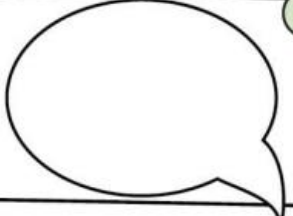
4 How Many? T


5 Place the numbers in order T
4 8 2

6 T
"10, 20, 30,
40, 50"

7 T
I know I have 5
fingers on each
hand and 10
altogether

8 Double 3 is T


9 T
1 'more
than' 4 is 

10 T
1 'less
than' 6 is 





Note: Multiple copies of this CLIC Challenge are not provided since all scores arise through teacher assessment.

CLIC 3

Name: _____

Class: _____

Date: _____


1 T

"1, 2, 3, 4,
5.....20"

2 T

11 T

13 15




3 T

17 T

20 18

4 T



How Many?

5 T

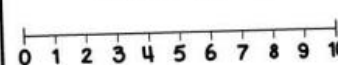
I can count out up to 10 objects from a pile

6 T

"10, 9, 8, 7,
6, 5, 4, 3, 2, 1,
Zero"

7 T

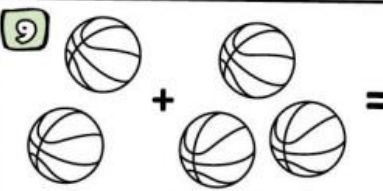
What is 3 more than 4?




8 T

"10, 20, 30,
40, 50, 60, 70
80, 90, 100"

9 T



10 T



Take away 4, how many are left?



MY LAST SCORE?!

HAVE I BEAT THAT?!

10



Note: Multiple copies of this CLIC Challenge are not provided since all scores arise through teacher assessment.

CLIC 4

Name: _____

Class: _____

Date: _____

1 T
"50, 51, 52,
.....58, 59"

2 T
Complete the
sequence
35, 36, 37...
 , ,

3 T
30 50
70 80

4 T
46 39
21 82

5 T
"5, 10, 15, 20, 25"

6 T
"5, 10, 15, 20,
25, 30, 35, 40,
45, 50"

7 T
"2, 4, 6, 8, 10"

8 T
I can tell who
won / was
first / second
/ third / last

9 T
4 + = 10

10 T
Count backwards
"20, 19, 18
.....3, 2, 1, Zero"



MY LAST SCORE?! HAVE I BEAT THAT?!

10



Name: _____

Class: _____

Date: _____

1 Tick the number
Three Hundred
300 800 900


2 Write a number
'more than' 12
but 'less than' 20

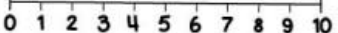
3 Count backwards
49, 48, 47,
 , ,


4 Count backwards
83, 82, 81, , ,

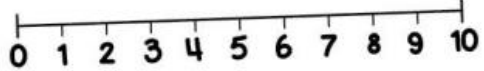
5 Double 30 is ...

6 $4 + \square = 10$

7 
Tick the correct number sentence
 $2 + 4 =$ $3 + 6 =$ $4 + 3 =$

8 $5 + 2 =$


9 
Tick the correct number sentence
 $4 - 2 =$ $8 - 5 =$ $7 - 4 =$

10 $6 - 4 =$




MY LAST SCORE?!

HAVE I BEAT THAT?!

10



Name:

Class:

Date:

1 **46**

2 **Place in order**
13 11 17 14

3 **Complete the sequence**
14, , 18, 20

4 **Complete the sequence**
160, 170, , 190, 200

5 **Circle the odd numbers**
14 15 21 24

6 **Write the fact family for:**
8 + 6 = 14

7 **16 + 3 =**

8 **16 + 7 =**

9 **16 - 3 =**

10 **16 - 7 =**



MY LAST SCORE?!

HAVE I BEAT THAT?!

10



CLIC 7

SET: 1

Name: _____

Class: _____

Date: _____

1 Complete the sequence

300, 400, ,
, 700

2

$30 + 40 =$

3

Double 34 is

4

Double
70 is

5

Half of
70 is

6

Write the fact
family for:

$30 + 40 = 70$

.....

.....

.....

7

$60 + 10 =$

8

$73 + 10 =$

9

$80 - 10 =$

10

$43 - 10 =$



MY LAST SCORE?!

HAVE I BEAT THAT?!

10



Name: _____

Class: _____

Date: _____



CLIC 8

SET: 1

1 Complete the sequence

50, 100, 150,

,

2

$300 + 400 =$

3

$43 + \square = 50$

4 Mully is hiding behind the biggest multiple of 10 without going past 43

5

$32 + 4 =$

6 $30 + 60 =$

7 $80 - 6 =$

8 $48 - 5 =$

9 $43 - 7 =$

10 $343 - 7 =$

MY LAST SCORE?!

HAVE I BEAT THAT?!

10



Name: _____

Class: _____

Date: _____



CLIC 9

SET: 1

1 Place in order
39 93 54 69

2 $3000 + 8000 =$

3 Double 49 is
Half of 300 is

4 $47 + \square = 100$

5 $43 \times 10 =$
 $810 \div 10 =$



6 $32 + 24 =$

7 $83 - 49 =$

8 $48 \div 5 =$

9
$$\begin{array}{r} 36 \\ +42 \\ \hline \end{array}$$

10
$$\begin{array}{r} 96 \\ -42 \\ \hline \end{array}$$

MY LAST SCORE?!

HAVE I BEAT THAT?!

10



Name: _____

Class: _____

Date: _____

1 **456**

2 **3000 + 8000 =**

3 **Double 39 is**
Half of 500 is

4 **57 + = 100**

6 **48 + 76 =**

5 **83 x 10 =**
510 ÷ 10 =

7 **100 - 28 =**

8 **38 ÷ 5 =**

9 **37**
+ 89

10 **76**
- 48



MY LAST SCORE?!

HAVE I BEAT THAT?!

10



Name:

Class:

Date:



1 Complete the sequence

12, , 20,
, .

2 Double 400 is


3 Double 900 is

4 $30 \times 50 =$

5 Write your coin card for... x21

x 21		
1		
2		
5		
10		
20		
50		
100		

6 Mully is hiding behind the biggest multiple of 4 without going past 50



7 $423 + 25 =$

9 $\begin{array}{r} 442 \\ + 36 \\ \hline \end{array}$

8 $526 + 49 =$

10 $\begin{array}{r} 981 \\ - 32 \\ \hline \end{array}$

MY LAST SCORE?!

HAVE I BEAT THAT?!

10



Name:

Class:

Date:

1 **4.6**

2 **Place in order**
311 131 331

3 **Double**
437 is

4 **Write the fact family for**
4 x 30 = 120

.....

.....

.....

5 **431 + 325 =**

6 **3 x 82 =**

7 **53 ÷ 4 =**

8 **686**
+ 549

9 **35**
x 5

10 **3 | 69**





Name:

Class:

Date:

1 **4.89**

2 **Place in order**
3142 2143 2431

3 **Complete the sequence**
36, , 54,
, 72

4 **Complete the sequence**
1250, 1500, 1750,
2000, .

5

6

 = 1000."/>

7

8

9

$$\begin{array}{r} 5686 \\ - 749 \\ \hline \end{array}$$

10

$$\begin{array}{r} 3 \overline{)81} \\ \hline \end{array}$$


MY LAST SCORE?!

HAVE I BEAT THAT?!

10



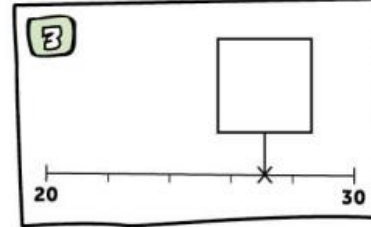
Name:

Class:

Date:

1 Place in order
4.6 6.4 4.4


2 
4.25 4.5 4.75





4 $0.6 + 0.8 =$


5 Half of 45 is

6 $48 \div 10 =$

7 $486 + 735 =$ 

8 $8 \times 79 =$ 

9
$$\begin{array}{r} 5686 \\ + 749 \\ \hline \end{array}$$
 

10
$$\begin{array}{r} 85 \\ \times 6 \\ \hline \end{array}$$
 



MY LAST SCORE?!

HAVE I BEAT THAT?!

10



Name:

Class:

Date:



1 Place in order
4.21 2.41 2.21


2 Half of 356 is

3 Mully is hiding behind the biggest multiple of 4 without going past 362




4 Write down 5 factors of 36:

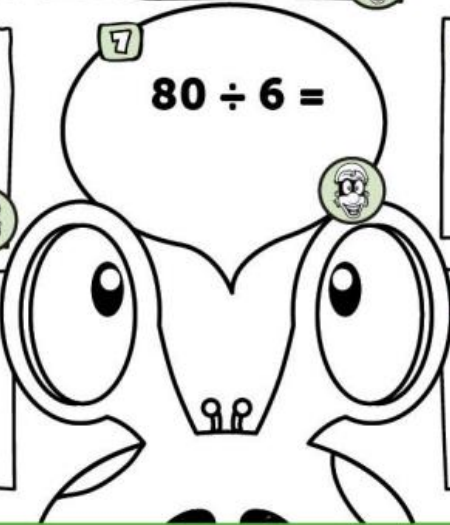
5 $476 - 84 =$




6 $50 \div 6 =$



7 $80 \div 6 =$



8 $5685 - 4749$



9 385×6

10 $9 \overline{)3654}$



MY LAST SCORE?!

HAVE I BEAT THAT?!

10



Name:

Class:


Date:



1 Place in order
4.21 2.41 2.21

2 Half of 356 is

3 Mully is hiding
behind the biggest
multiple of 4
without going past
362



4 Write down 5
factors of 36:

5 $476 - 84 =$

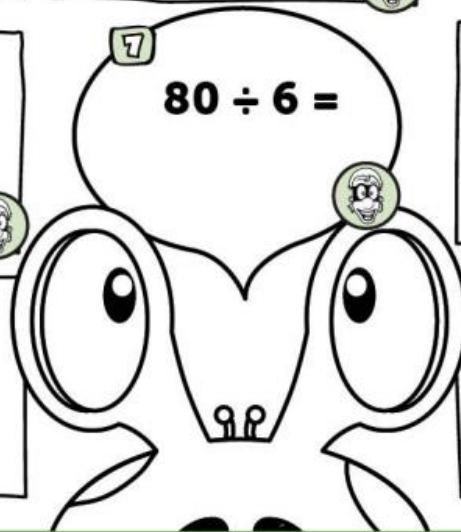
6 $50 \div 6 =$

7 $80 \div 6 =$

8 5685
 $- 4749$

9 385
 $\times 6$

10 $9 \overline{)3654}$



MY LAST SCORE?!

HAVE I BEAT THAT?!

10



Name: _____

Class: _____


Date: _____



1 $2.8 \times 100 =$
 $14.3 \div 100 =$


2 $4 \times 0.09 =$

3 Mully is hiding behind the biggest multiple of 14 without going past 155




4 Circle the square numbers
14 16
25 29


5 $4.9 + 3.6 =$



6 $463 - 189 =$




7
$$\begin{array}{r} 868 \\ 582 \\ + 654 \\ \hline \end{array}$$




8
$$\begin{array}{r} 95686 \\ - 54749 \\ \hline \end{array}$$



9
$$\begin{array}{r} 485 \\ \times 16 \\ \hline \end{array}$$



10 $6 \overline{)503}$



MY LAST SCORE?!

HAVE I BEAT THAT?!

10



Name:

Class:

Date:

1 **4.389**

2 Round to the nearest 1000
2,567,328

3

25	0	-25	-50	
----	---	-----	-----	--

4

-3
-7

 The gap is

5 $4.31 \times 1000 =$
 $134.8 \div 1000 =$


6 Circle the Prime Numbers
3 9 15 17

7 $3.89 + 2.42 =$

8 $4.5 - 1.7 =$

9 $273 \div 13 =$

10 $81686 + 66549$



MY LAST SCORE?!

HAVE I BEAT THAT?!

10

BEAT THAT!

Name: _____

Class: _____

Date: _____



1 Place in order
1.444 1.71 1.6

2 $\begin{array}{r} 4 \\ -10 \end{array}$ The gap is

3 $8.67 + 9.8 =$

4 $5.6 - 3.75 =$

5 $6 \times 2.37 =$

6 $43.8 \div 6 =$

7 $8.689 + 6.54 =$

8 $8.625 - 4.8 =$

9 $\begin{array}{r} 5.24 \\ \times 26 \\ \hline \end{array}$

10 $22 \overline{) 6721}$

MY LAST SCORE?!

HAVE I BEAT THAT?!

10



Name:

Class:

Date:

1 Mully went to the shop and bought books for £45, games for £321 and a TV for £3421. How much did it cost altogether?

2 Pom took away 6777g of sweets from the weighing scales. He started with 954.5g. What is the weight on the scales?

3 $432 \times 66\text{cm} =$

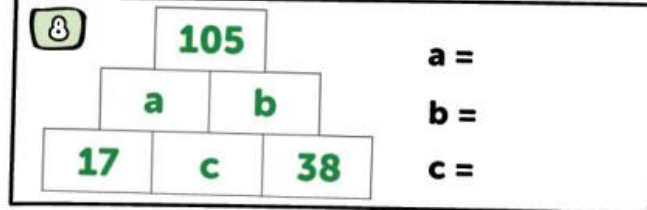


4 $311\text{m} \div 14 =$

5 Which symbol is correct.
<, > or = ?
134.5m 134m

6 Pim has 1765kg of oranges. He shared them between 1000 people. How many kilograms of oranges does each person get?

7 p lies halfway between 3.6 and 3.9.
q lies half-way between 3.9 and 4.5. What is $p + q$?



9 Increase £32 by 15%

10 Jo has 7 boxes. Each box has 1.55kg of sugar. What is the total weight?

